

# I Late Night O-Test (orientació a peu / foot orienteering)

## Respostes

1. El símbol del mapa:  de quins colors pot ser?  
*Map symbol: which colors can it be?*

- 1 negre, marró *black, brown*  
**11 negre, marró, blau** ***black, brown, blue***  
 21 negre, marró, verd *black, brown, green*

(nota: el negre és de diàmetre un pèl més petit que el marró o blau)

2. Els 5 primers de la classificació per clubs de la Copa Catalana 2004 -2005 han estat, per ordre de 1er a 5è:

*The top 5 in clubs over all classification in Copa Catalana 2004-2005 are, in order from 1<sup>st</sup> to 5<sup>th</sup>:*

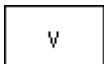
- 2 1. COC - 2. BO - 3. XXO - 4. OROS - 5. U.E. VIC  
 12 1. COC - 2. BO - 3. XXO - 4. OROS - 5. GRIONS  
**22 1. COC - 2. XXO - 3. BO - 4. OROS - 5. GRIONS**

(1er COC 25.269,30 punts; 2on XINOXANO 23.372,25; 3er BO 22.128,52; 4rt OROS 21.642,85; 5e GRIONS)

3. Quin d'aquests números estava escrit a la fita anterior?  
*Which of those numbers were written in last control?*






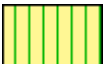






- 3 53**  
 13 44  
 23 34

(14, 32, 53)

4. El símbol del mapa  de quins colors pot ser?  
*Map symbol which colors can it be?*

- 4 negre, marró *black, brown*  
 14 negre, verd, marró *black, green, brown*  
**24 negre, marró, blau** ***black, brown, blue***

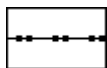
5. De cursa més ràpida a més lenta, quina és la resposta correcta?  
*Faster running speed to slower, with is the correct answer?*

- |    |   |   |  |   |
|----|---|---|--|---|
| 5  | 405 (80-100%)<br>        | 409 (20-60%)<br>         | 407 (60-80%)<br>            | 410 (0-20%)<br>        |
| 15 | 405 (80-100%)<br>        | 403_407 (60-80%)<br>     | 402 (80-100%)<br>           | 410 (0-20%)<br>        |
| 25 | <b>405 (80-100%)</b><br> | <b>402 (80-100%)</b><br> | <b>403_407 (60-80%)</b><br> | <b>410 (0-20%)</b><br> |

6. Quants clubs hi ha amb corredors federats 2004/5 a Catalunya ?  
*How many clubs with licensed runners 2004/5 there are in Catalonia ?*

6      12  
 16    11  
 26    10

(Aligots BO COC Farra Grions Montsant NiE Oros Oxigen UExVic UPC XXO)



7. Es pot passar?  
*Is crossable?*

7      Si                  Yes  
 17    No                  No  
 27    **Potser**          **Maybe**



8. Es pot passar?  
*Is crossable?*

8      No                  No  
 18    **Si**                  **Yes**  
 28    Potser              *Maybe*

9. La primera organització catalana d'una cursa d'orientació la van realitzar:  
*First orienteering course organized by catalans was:*

9      **16 – 6 – 1987 / Pablo Martinez / Club Minerva / I del Pallars**  
 19    18 – 7 – 1988 / Carles Lladó / COC / Cursa Collserola (Coll de la Ventosa)  
 29    18 – 7 – 1988 / Carles Giralt / GEPS / Cursa Santuari de la Salut Sant Feliu



10. Que significa?  
*What does it mean?*

|    |  |                                  |
|----|--|----------------------------------|
| 10 | <b>Fita 6, codi 54, turó, suau, al peu NE</b>  | <b>Hill, low, northeast foot</b> |
| 20 | Fita 6, codi 54, turó, suau, exterior banda NE | Hill, low, northeast side        |
| 30 | Fita 6, codi 54, turó, suau, vora NE           | Hill, low, NE edge               |